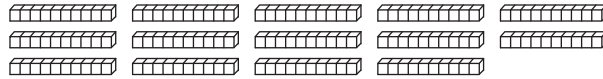
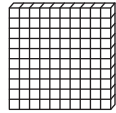


**Place Value Blocks - 3 Digits**

L253

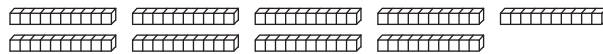
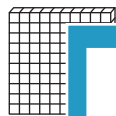
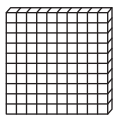
Write the number formed by base ten blocks.

1)



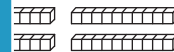
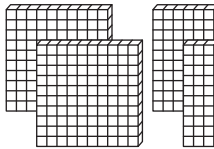
\_\_\_\_\_

2)



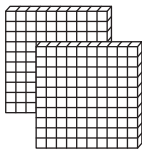
\_\_\_\_\_

3)



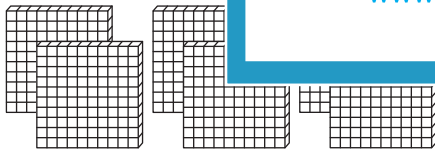
\_\_\_\_\_

4)



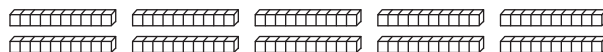
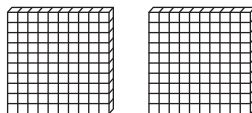
\_\_\_\_\_

5)



\_\_\_\_\_

6)



\_\_\_\_\_

# PREVIEW

Gain complete access to the largest collection of worksheets in all subjects!

Members, please log in to download this worksheet.

Not a member? Please sign up to gain complete access.

[www.mathworksheets4kids.com](http://www.mathworksheets4kids.com)