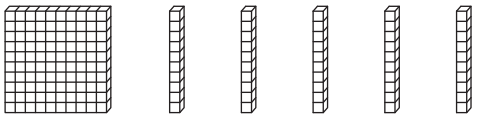
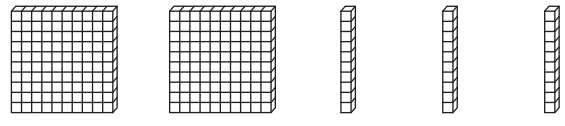


Name : \_\_\_\_\_

# Comparing 3-Digit Numbers - Base Ten Blocks

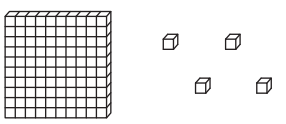

Count the base-ten blocks in each set, and compare using  $<$ ,  $>$ , or  $=$ .

1)  

$\underline{\hspace{2cm}}$        $\bigcirc$        $\underline{\hspace{2cm}}$

2)  

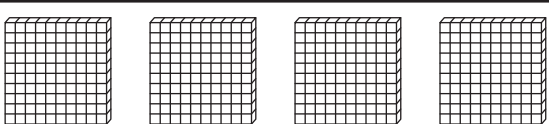
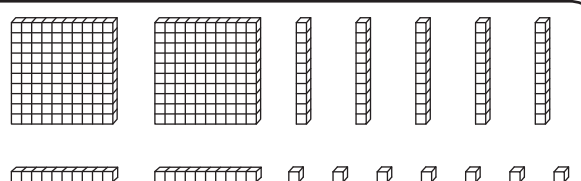
$\underline{\hspace{2cm}}$        $\bigcirc$        $\underline{\hspace{2cm}}$

3)  

$\underline{\hspace{2cm}}$        $\bigcirc$        $\underline{\hspace{2cm}}$

4)  

$\underline{\hspace{2cm}}$        $\bigcirc$        $\underline{\hspace{2cm}}$

5)  

$\underline{\hspace{2cm}}$        $\bigcirc$        $\underline{\hspace{2cm}}$

**PREVIEW**

Gain complete access to the largest collection of worksheets in all subjects!

Members, please log in to download this worksheet.

Not a member? Please sign up to gain complete access.

[www.mathworksheets4kids.com](http://www.mathworksheets4kids.com)