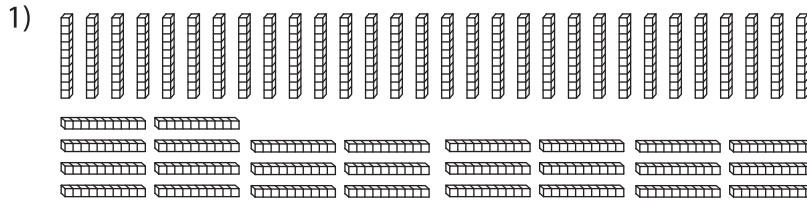



Hundreds & Tens

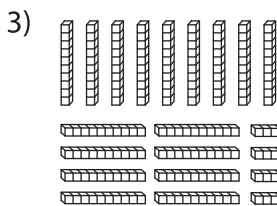
How many hundreds can you form? Also find the tens that left over.



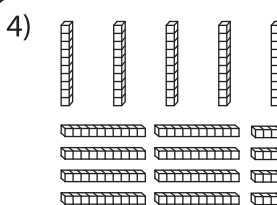
_____ hundreds _____ tens



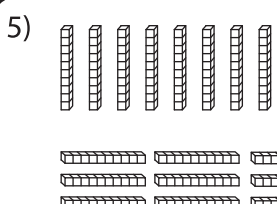
_____ hundreds _____ tens



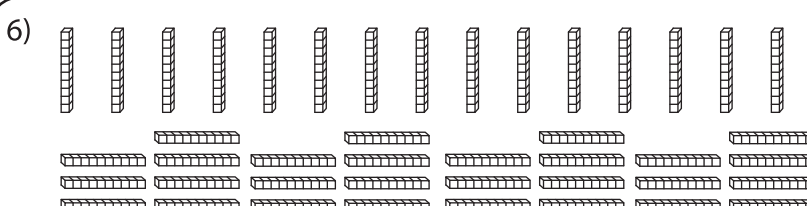
_____ hundreds _____ tens



_____ hundreds _____ tens



_____ hundreds _____ tens



_____ hundreds _____ tens

PREVIEW

Gain complete access to the largest collection of worksheets in all subjects!

Members, please log in to download this worksheet.

Not a member? Please sign up to gain complete access.

www.mathworksheets4kids.com