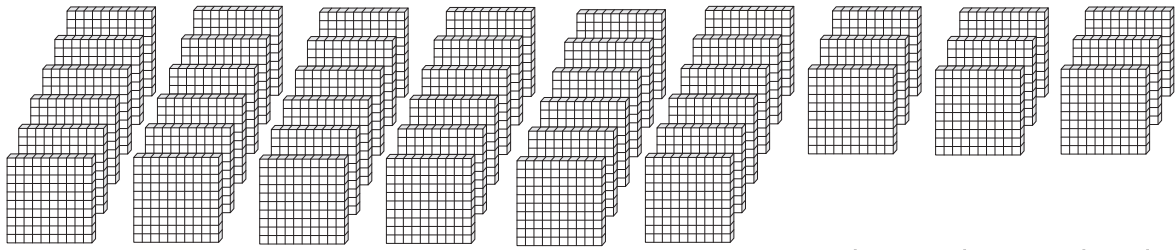


**Thousands & Hundreds**

How many thousands can you form? Also find the hundreds that left over.

1)



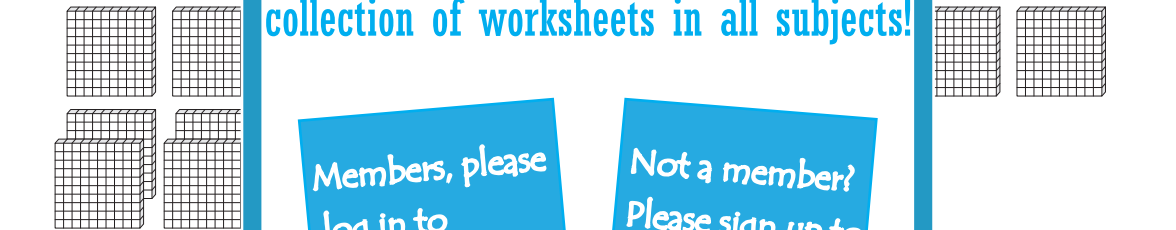
\_\_\_\_\_ thousands \_\_\_\_\_ hundreds

2)



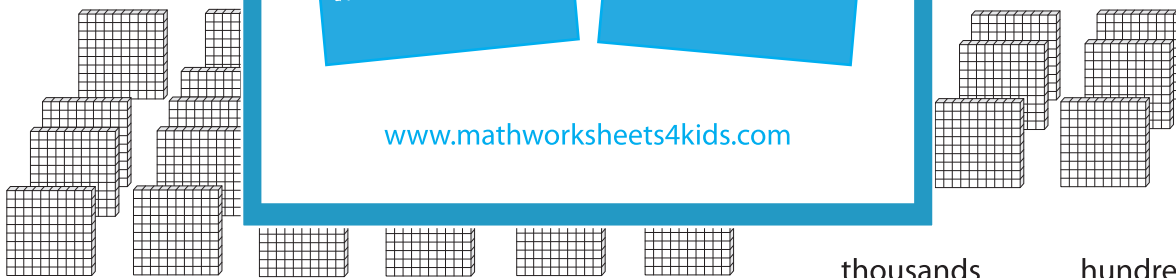
\_\_\_\_\_ thousands \_\_\_\_\_ hundreds

3)



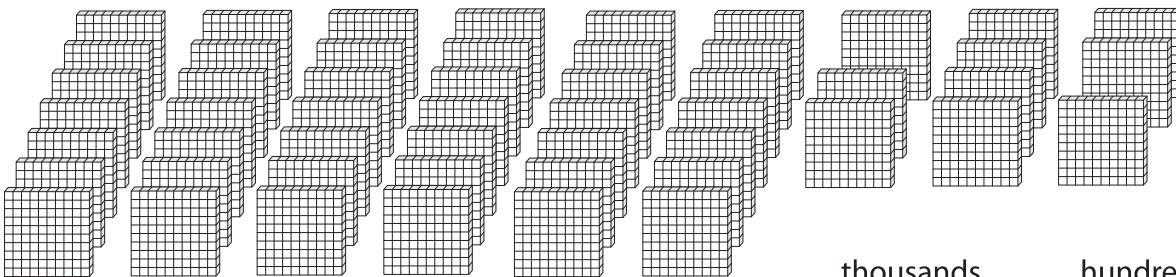
\_\_\_\_\_ thousands \_\_\_\_\_ hundreds

4)



\_\_\_\_\_ thousands \_\_\_\_\_ hundreds

5)



\_\_\_\_\_ thousands \_\_\_\_\_ hundreds

**PREVIEW**

Gain complete access to the largest collection of worksheets in all subjects!

Members, please log in to download this worksheet.

Not a member? Please sign up to gain complete access.

[www.mathworksheets4kids.com](http://www.mathworksheets4kids.com)