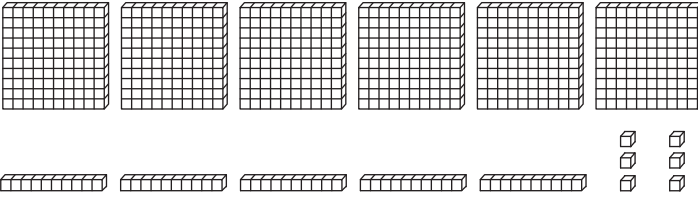
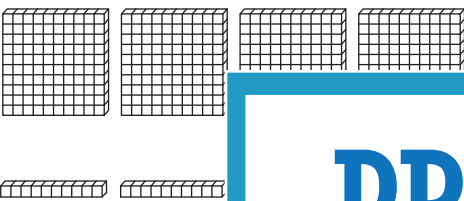


**Place Value Blocks - 3 Digits**

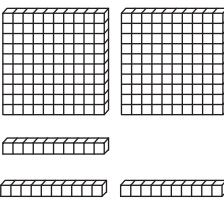
Write the number formed by base ten blocks.

1) 

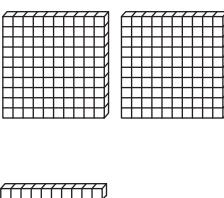
\_\_\_\_\_

2) 

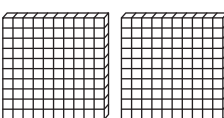
\_\_\_\_\_

3) 

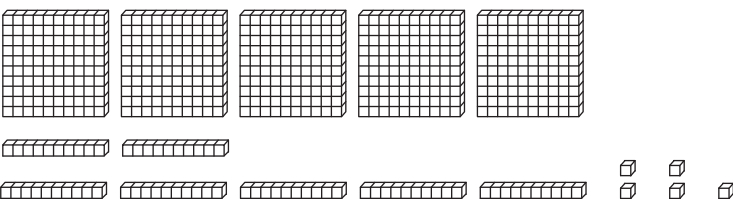
\_\_\_\_\_

4) 

\_\_\_\_\_

5) 

\_\_\_\_\_

6) 

\_\_\_\_\_

**PREVIEW**

Gain complete access to the largest collection of worksheets in all subjects!

Members, please log in to download this worksheet.

Not a member? Please sign up to gain complete access.

[www.mathworksheets4kids.com](http://www.mathworksheets4kids.com)