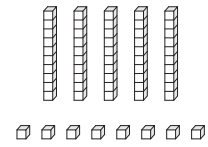
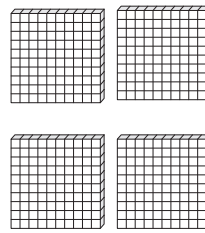
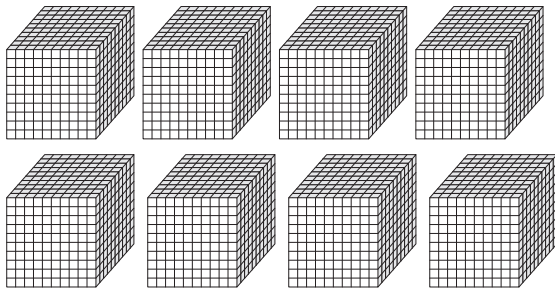


**Place Value Blocks - 4 Digits**

L155

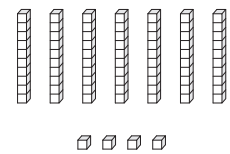

Write the number formed by base ten blocks.

1)




\_\_\_\_\_

2)



\_\_\_\_\_

3)

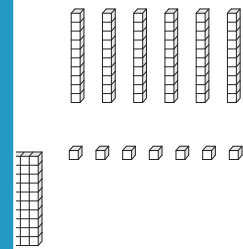


Gain complete access to the largest collection of worksheets in all subjects!

Members, please log in to download this worksheet.

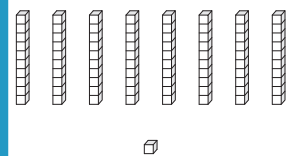

Not a member? Please sign up to gain complete access.

[www.mathworksheets4kids.com](http://www.mathworksheets4kids.com)



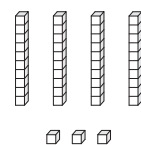

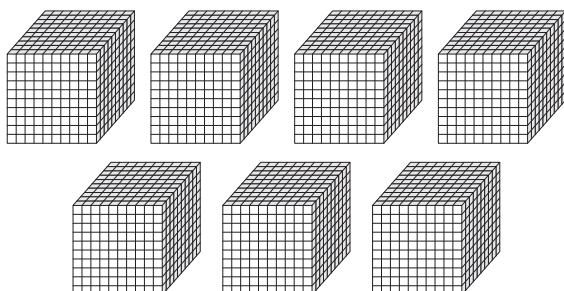
\_\_\_\_\_

4)



\_\_\_\_\_

5)



\_\_\_\_\_