


Capacity Estimation

Customary Units: S3


Estimate the capacity of each object.

1)



- 1 cup
- 2 quarts
- 3 pints

2)



- 3 pints
- 5 gallons
- 2 quarts

3)



- 6 quarts
- 1 cup
- 2 pints



- 2 quarts
- 1 gallon
- 3 pints

5)



- 1 pint
- 1 gallon
- 2 cups



- 1 cup
- 2 quarts
- 3 pints

PREVIEW


Gain complete access to the largest
collection of worksheets in all subjects!

Members, please
log in to
download this
worksheet.

Not a member?
Please sign up to
gain complete
access.

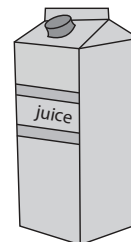
www.mathworksheets4kids.com

7)



- 1 gallon
- 3 quarts
- 1 pint

8)




- 1 pint
- 2 quarts
- 3 cups

Answer key**Capacity Estimation**

Customary Units: S3


Estimate the capacity of each object.

1)



- **1 cup**
- 2 quarts
- 3 pints

2)



- 3 pints
- **5 gallons**
- 2 quarts

3)



- 6 quarts
- 1 cup
- **2 pints**



- 2 quarts
- 1 gallon
- 3 pints

5)



- 1 pint
- **1 gallon**
- 2 cups



- 1 cup
- 2 quarts
- 3 cups

PREVIEW


Gain complete access to the largest collection of worksheets in all subjects!

Members, please log in to download this worksheet.

Not a member? Please sign up to gain complete access.


www.mathworksheets4kids.com

7)



- 1 gallon
- 3 quarts
- **1 pint**

8)



- 1 pint
- **2 quarts**
- 3 cups