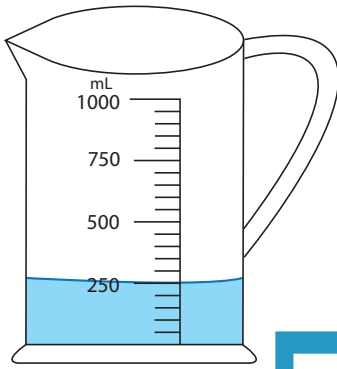


Measuring Jug

Sheet 2

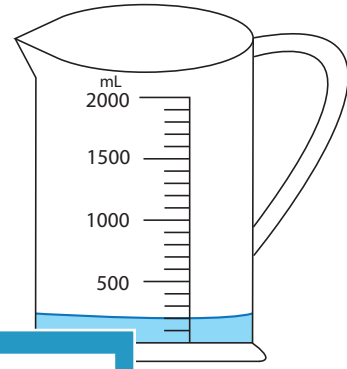
1) How much water required to fill each jug up to 950 mL?

a)



_____ mL

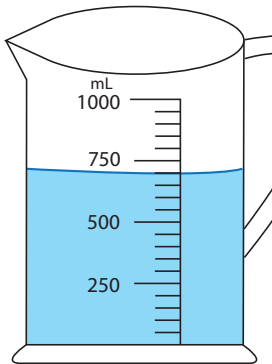
b)



_____ mL

2) How much water should

a)



_____ mL

PREVIEW

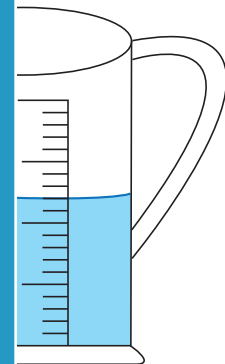
Gain complete access to the largest collection of worksheets in all subjects!

Members, please log in to download this worksheet.

Not a member? Please sign up to gain complete access.

www.mathworksheets4kids.com

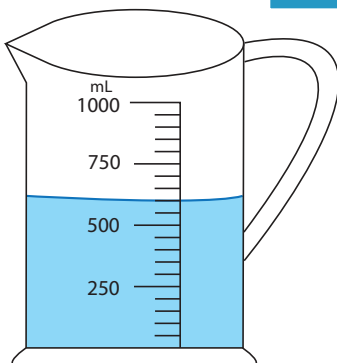
level to 600 mL?



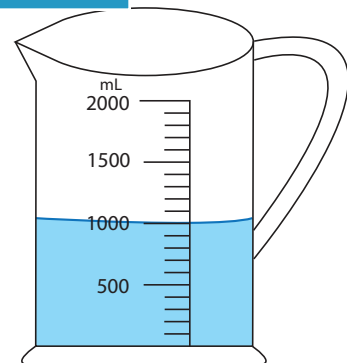
_____ mL

3) If you add 350 mL of water

a)



_____ mL

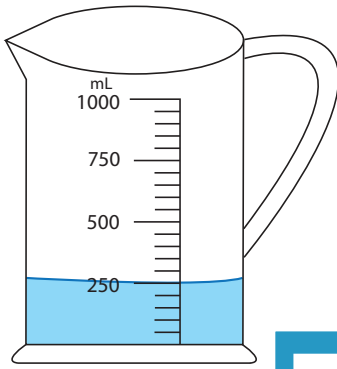


_____ mL

Answer key
Measuring Jug

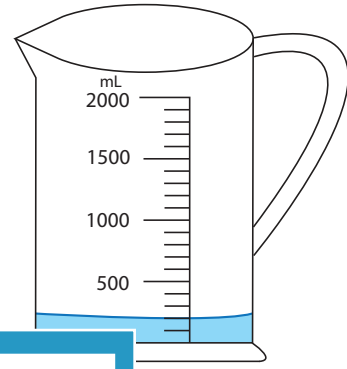
1) How much water required to fill each jug up to 950 mL?

a)



700 mL

b)

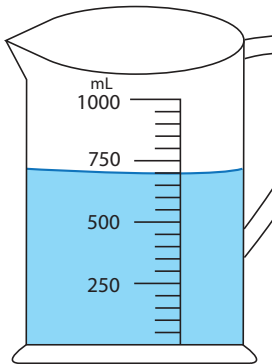


100 mL

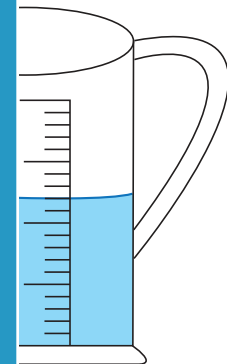
2) How much water should

level to 600 mL?

a)



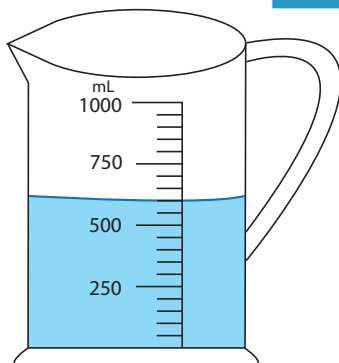
100 mL



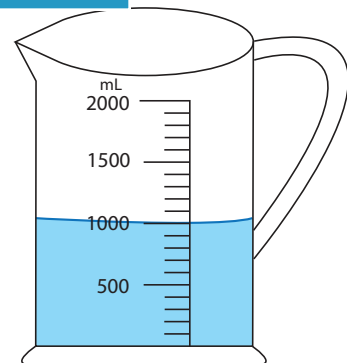
200 mL

3) If you add 350 mL of water

a)



950 mL



1350 mL

PREVIEW

Gain complete access to the largest collection of worksheets in all subjects!

Members, please log in to download this worksheet.

Not a member? Please sign up to gain complete access.

www.mathworksheets4kids.com