

## Capacity - More/Less

Metric Units: S3


Choose the correct choice that best estimates the capacity of each object.

1)



- Less than 400 mL  
 More than 400 mL

2)



- Less than 1 L  
 More than 1 L

3)



- Less than  
 More than

# PREVIEW

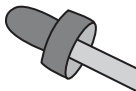
Gain complete access to the largest  
collection of worksheets in all subjects!

Members, please  
log in to  
download this  
worksheet.

Not a member?  
Please sign up to  
gain complete  
access.

[www.mathworksheets4kids.com](http://www.mathworksheets4kids.com)

5)




- Less than  
 More than



00 mL  
 00 mL

7)



- Less than 1 L  
 More than 1 L

8)



- Less than 5 L  
 More than 5 L

**Answer key**

**Capacity - More/Less**

Metric Units: S3


Choose the correct choice that best estimates the capacity of each object.

1)



- Less than 400 mL
- More than 400 mL

2)



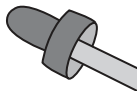
- Less than 1 L
- More than 1 L

3)




- Less than 1 L
- More than 1 L

5)



- Less than 100 mL
- More than 100 mL

7)



- Less than 1 L
- More than 1 L

8)



- Less than 5 L
- More than 5 L

**PREVIEW**

Gain complete access to the largest collection of worksheets in all subjects!

Members, please log in to download this worksheet.

Not a member? Please sign up to gain complete access.

[www.mathworksheets4kids.com](http://www.mathworksheets4kids.com)