

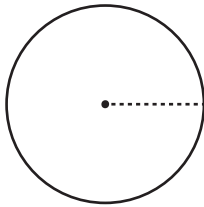
Name : _____

Area

DS1

Find the area of each circle. Round your answer to two decimal palces. (use $\pi = 3.14$)

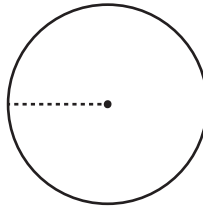
1)



Circumference = 77.87 in

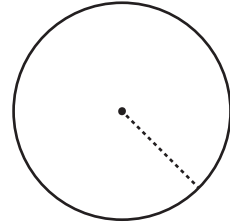
Area = _____

2)



Circumference = 111.78 ft

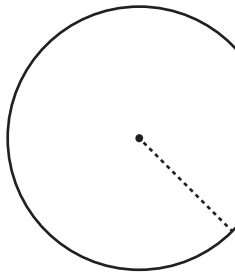
3)



Circumference = 56.08 yd

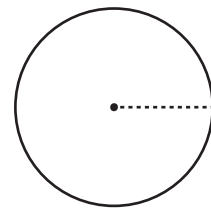
Area = _____

4)



Circumference = 41

Area = _____



Circumference = 27.32 in

Area = _____

PREVIEW

Gain complete access to the largest collection of worksheets in all subjects!

Members, please log in to download this worksheet.

Not a member? Please sign up to gain complete access.

www.mathworksheets4kids.com

7) A circle has a c
decimal places

Area = _____

8) The circumference of a circular lid is 102.99 in. What is the area of the lid? Round your answer to two

Area = _____