

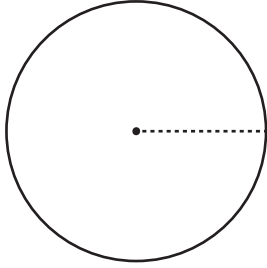
Name : \_\_\_\_\_

## Area

DS2

Find the area of each circle. Round your answer to two decimal places. (use  $\pi = 3.14$ )

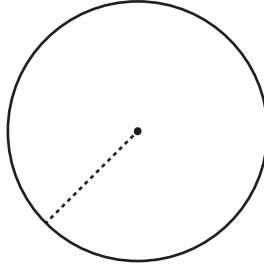
1)



Circumference = 46.6 yd

Area = \_\_\_\_\_

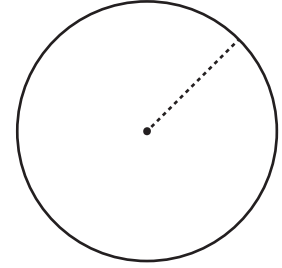
2)



Circumference = 18.34 in

Circumference = 18.34 in

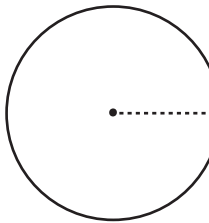
3)



Circumference = 41.82 ft

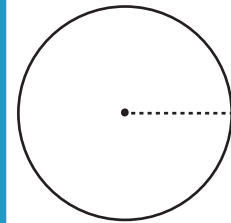
Area = \_\_\_\_\_

4)



Circumference = 82

Area = \_\_\_\_\_



Circumference = 8.23 yd

Area = \_\_\_\_\_

# PREVIEW

Gain complete access to the largest collection of worksheets in all subjects!

Members, please log in to download this worksheet.

Not a member? Please sign up to gain complete access.

[www.mathworksheets4kids.com](http://www.mathworksheets4kids.com)

7) If a dart board the dart? Round

Area = \_\_\_\_\_

8) The circumference of a circular sheet is 72.2 in. Find the area of color paper required to cover the sheet. Round your answer to two decimal places. (use  $\pi = 3.14$ )

Area = \_\_\_\_\_

Area available for landing