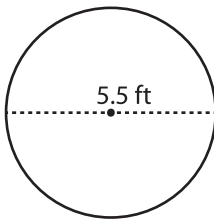


Name : _____

Circle - Area

Diameter: DS2

Example :



Area of a circle = πr^2

Diameter = 5.5 ft

Radius (r) = 2.75 ft

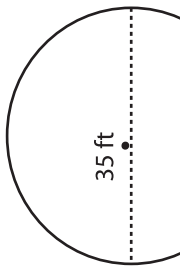
Area = πr^2

= 3.14 x 2.75 x 2.75

Area = **23.75 ft²**

Find the area of each circle. Round your answer to two decimal places. (use $\pi = 3.14$)

1)



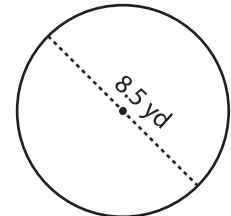
Area =

2)

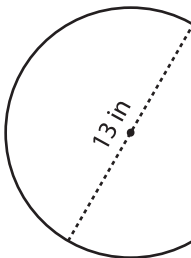


Area =

3)



4)



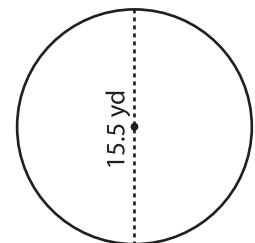
Area =

PREVIEW
Gain complete access to the largest collection of worksheets in all subjects!

Members, please log in to download this worksheet.

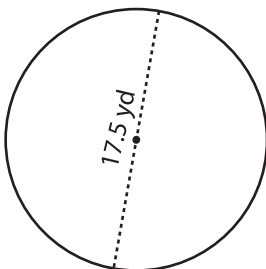
Not a member? Please sign up to gain complete access.

www.mathworksheets4kids.com



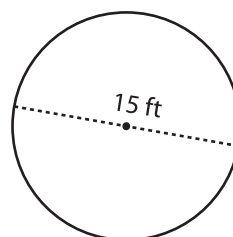
Area =

7)



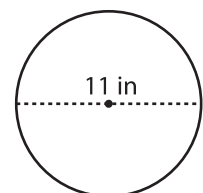
Area =

8)



Area =

9)



Area =