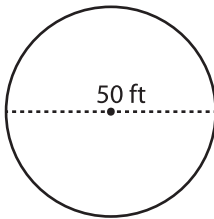


Name : _____

Circle - Area

Diameter: MS1

Example :



Area of a circle = πr^2

Diameter = 50 ft

Radius (r) = 25 ft

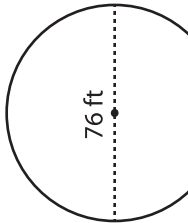
Area = πr^2

= $3.14 \times 25 \times 25$

Area = **1962.5 ft²**

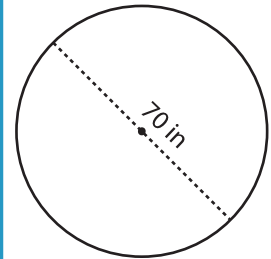
Find the area of each circle. Round your answer to the nearest tenth. (use $\pi = 3.14$)

1)



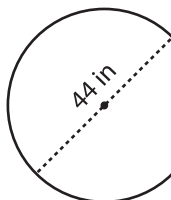
Area =

2)



Area =

4)



Area =

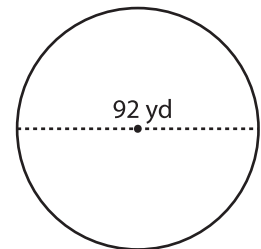
PREVIEW

Gain complete access to the largest collection of worksheets in all subjects!

Members, please log in to download this worksheet.

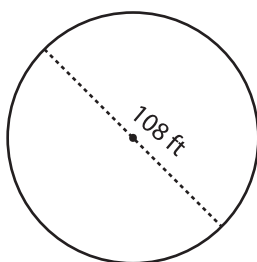
Not a member? Please sign up to gain complete access.

www.mathworksheets4kids.com



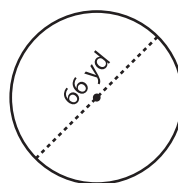
Area =

7)



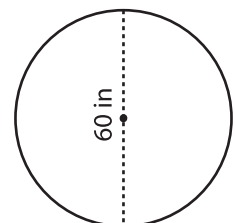
Area =

8)



Area =

9)



Area =