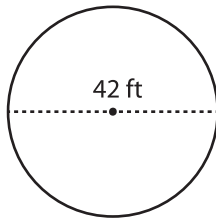


Name : _____

Circle - Area

Diameter: MS2

Example :



$$\text{Area of a circle} = \pi r^2$$

$$\text{Diameter} = 42 \text{ ft}$$

$$\text{Radius (r)} = 21 \text{ ft}$$

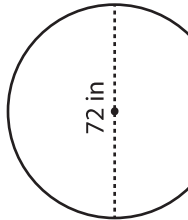
$$\text{Area} = \pi r^2$$

$$= 3.14 \times 21 \times 21$$

$$\text{Area} = \mathbf{1384.7 \text{ ft}^2}$$


Find the area of each circle. Round your answer to the nearest tenth. (use $\pi = 3.14$)

1)



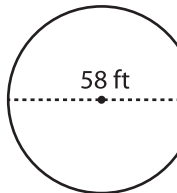
Area =

2)



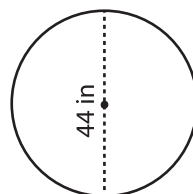
Area =

4)



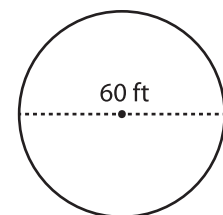
Area =

8)



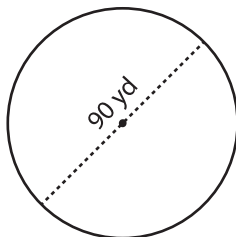
Area =

9)



Area =

7)



Area =

PREVIEW

Gain complete access to the largest collection of worksheets in all subjects!

Members, please log in to download this worksheet.

Not a member? Please sign up to gain complete access.

www.mathworksheets4kids.com