

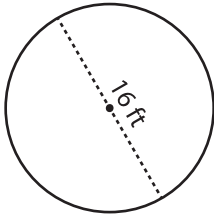
Name : _____

Circle - Area

Radius/Diameter: ES2

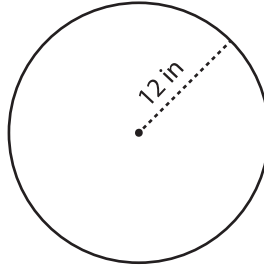
Find the area of each circle in terms of π .

1)



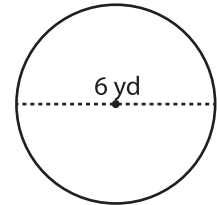
Area =

2)

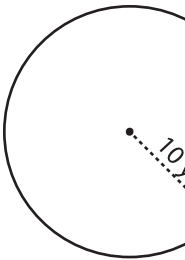


Area =

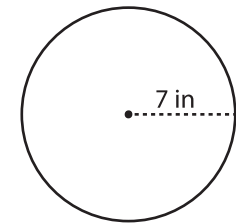
3)



4)



Area =



Area =

7) If the

a) 4π in

8) What

a) 676π yd²

b) 52π yd²

c) 26π yd²

d) 169π yd²

PREVIEW

Gain complete access to the largest collection of worksheets in all subjects!

Members, please log in to download this worksheet.

Not a member? Please sign up to gain complete access.

www.mathworksheets4kids.com

9) The diameter of the pizza is 45 in. What is the maximum area available for toppings? Write your answer in terms of π .

Area = _____

