

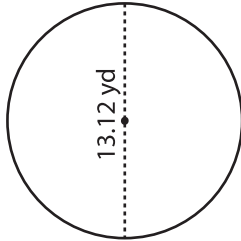
Name : _____

Circle - Area

Radius/Diameter: DS2

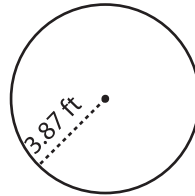
Find the area of each circle. Round your answer to two decimal places. (use $\pi = 3.14$)

1)



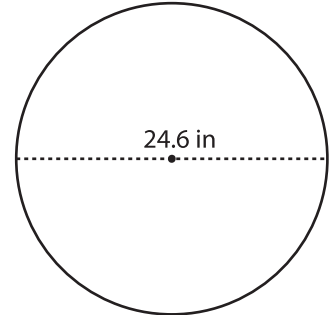
Area =

2)



Area =

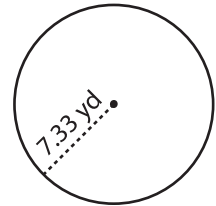
3)



4)



Area =



Area =

7) If the

a) 31.2

8) What

a) 979.29 yd² b) 244.82 yd² c) 110.90 yd² d) 55.45 yd²

PREVIEW

Gain complete access to the largest collection of worksheets in all subjects!

Members, please log in to download this worksheet.

Not a member? Please sign up to gain complete access.

www.mathworksheets4kids.com

9) The diameter of the cake is 38.72 in. What is the maximum area available for toppings? Round your answer to two decimal places. (use $\pi = 3.14$)

Area = _____

