

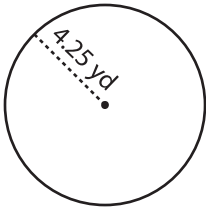
Name : _____

Circle - Area

Radius/Diameter: DS3

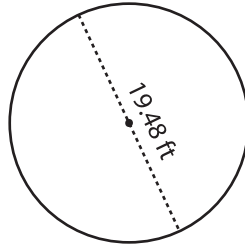
Find the area of each circle. Round your answer to two decimal places. (use $\pi = 3.14$)

1)



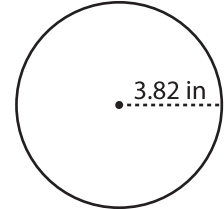
Area =

2)

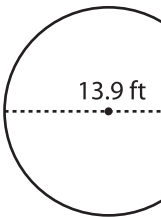


Area =

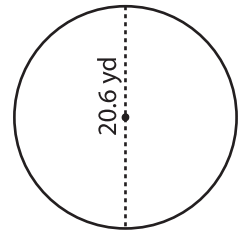
3)



4)



Area =



Area =

7) If the

a) 26.6

8) What

a) 104 ft^2

b) 861.09 ft^2

c) 215.27 ft^2

d) 52 ft^2

PREVIEW

Gain complete access to the largest collection of worksheets in all subjects!

Members, please log in to download this worksheet.

Not a member? Please sign up to gain complete access.

www.mathworksheets4kids.com

9) A circular park has a radius of 28.3 yd. Find the area of the circular park. Round your answer to two decimal places. (use $\pi = 3.14$)

Area = _____

