

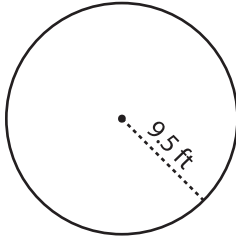
Name : _____

Circle - Area

Radius/Diameter: DS4

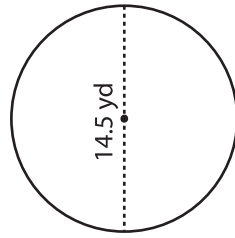
Find the area of each circle. Round your answer to two decimal places. (use $\pi = 3.14$)

1)



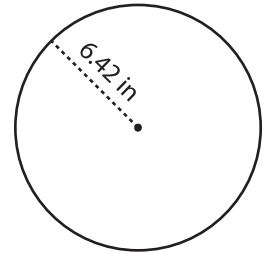
Area = _____

2)

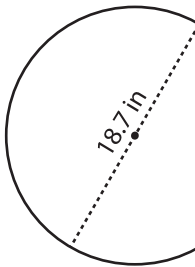


Area = _____

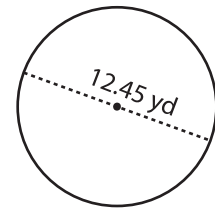
3)



4)



Area = _____



Area = _____

PREVIEW

Gain complete access to the largest collection of worksheets in all subjects!

Members, please log in to download this worksheet.

Not a member? Please sign up to gain complete access.

www.mathworksheets4kids.com

7) If the

a) 775.

8) What

a) 250.37 ft² b) 1003.28 ft² c) 124.47 ft² d) 62.23 ft²

9) A farmer tied his goat to a pole in the middle of a grassy land. If the length of the rope is 5.4 yd, how much area can the goat graze in at the most? Round your answer to two decimal places. (use $\pi = 3.14$)

Area = _____

