

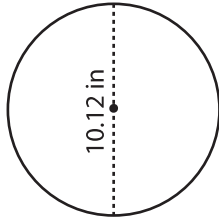
Name : _____

Circle - Area

Radius/Diameter: DS5

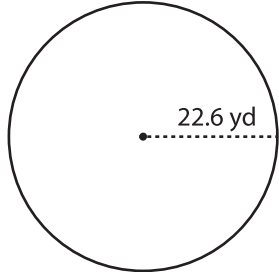
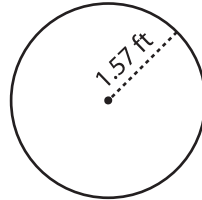
Find the area of each circle. Round your answer to two decimal places. (use $\pi = 3.14$)

1)



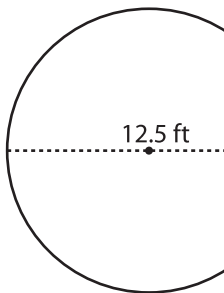
Area =

2)

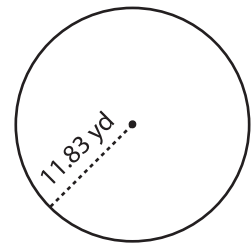


Area =

4)



Area =



Area =

7) If the

a) 3811

8) What

a) 364.89 yd² b) 478.29 yd² c) 110.90 yd² d) 145.45 yd²

in²

PREVIEW

Gain complete access to the largest collection of worksheets in all subjects!

Members, please log in to download this worksheet.

Not a member? Please sign up to gain complete access.

www.mathworksheets4kids.com

9) The diameter of the largest wall clock at Round the Clock, a clock store, is 18.5 in. Find the area of the wall clock. Round your answer to two decimal places. (use $\pi = 3.14$)

Area = _____

