

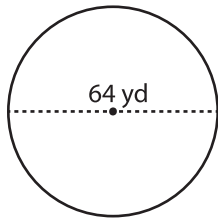
Name : _____

Circle - Area

Radius/Diameter: MS1

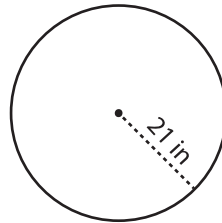
Find the area of each circle. Round your answer to the nearest tenth. (use $\pi = 3.14$)

1)

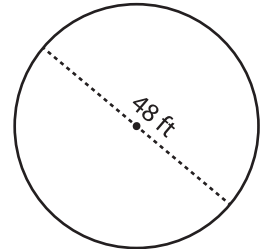


Area =

2)

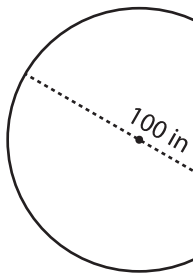


3)

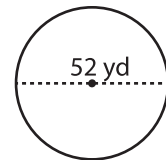


Area =

4)



Area =



Area =

7) If the

a) 9498

8) What

a) 188.4 yd² b) 11304 yd² c) 2826 yd² d) 376.8 yd²

PREVIEW

Gain complete access to the largest collection of worksheets in all subjects!

Members, please log in to download this worksheet.

Not a member? Please sign up to gain complete access.

www.mathworksheets4kids.com

9) If a goat is tethered with a rope 28 ft long, what will be the maximum area the goat can graze? Round your answer to the nearest tenth. (use $\pi = 3.14$)



Area = _____