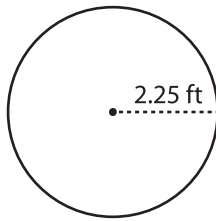


Name : _____

Circle - Area

Radius: DS1

Example :



$$\text{Area of a circle} = \pi r^2$$

$$\text{Radius (r)} = 2.25 \text{ ft}$$

$$\text{Area} = \pi r^2$$

$$= 3.14 \times 2.25 \times 2.25$$

$$\text{Area} = \mathbf{15.90 \text{ ft}^2}$$

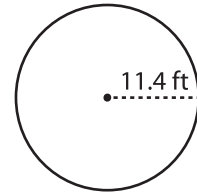
Find the area of each circle. Round your answer to two decimal places. (use $\pi = 3.14$)

1)



Area =

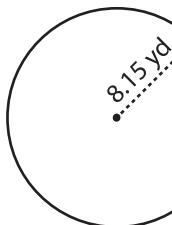
2)



Area =

3)

4)



Area =

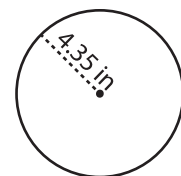
PREVIEW

Gain complete access to the largest collection of worksheets in all subjects!

Members, please log in to download this worksheet.

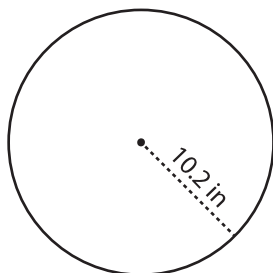
Not a member? Please sign up to gain complete access.

www.mathworksheets4kids.com



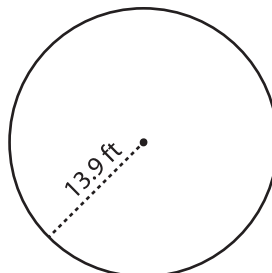
Area =

7)



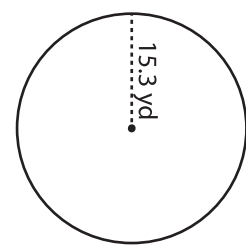
Area =

8)



Area =

9)



Area =