

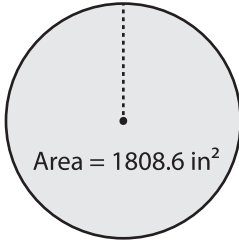
Name : _____

MS1

Circumference

Find the circumference of each circle. Round your answers to the nearest tenth. (use $\pi = 3.14$)

1)

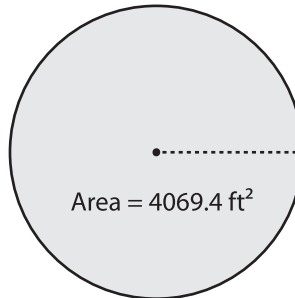


Radius = _____

Diameter = _____

Circumference = _____

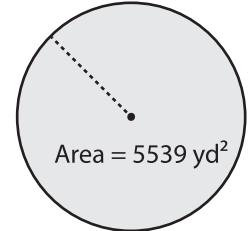
2)



Radius = _____

Diameter = _____

3)



Radius = _____

Diameter = _____

Circumference = _____

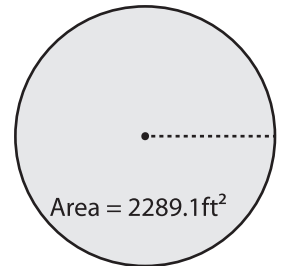
4)



Radius = _____

Diameter = _____

Circumference = _____



Radius = _____

Diameter = _____

Circumference = _____

PREVIEW

Gain complete access to the largest collection of worksheets in all subjects!

Members, please log in to download this worksheet.

Not a member? Please sign up to gain complete access.

www.mathworksheets4kids.com

7) A round carpet sheet? Round your answer to the nearest tenth.

Circumference = _____

8) If a pizza occupies the area 12462.7 in^2 , what will be the circumference of the pizza? Round your answer to the nearest tenth. (use $\pi = 3.14$)

Circumference = _____