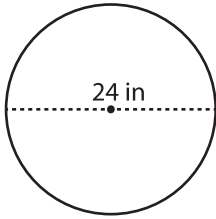


Name : _____

Circle - Circumference

Diameter: MS1

Example :



Circumference of a circle = $2\pi r$ or πd

Diameter (d) = 24 in

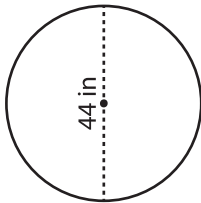
Circumference = πd

= 3.14×24

Circumference = **75.4 in**

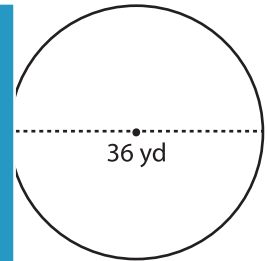
Find the circumference of each circle. Round your answer to the nearest tenth. (use $\pi = 3.14$)

1)



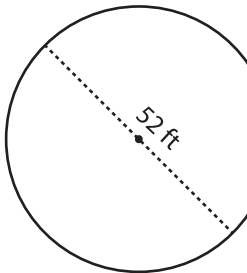
Circumference =

2)

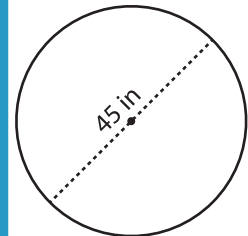


Circumference =

4)

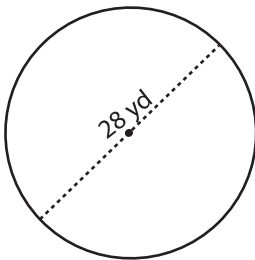


Circumference =



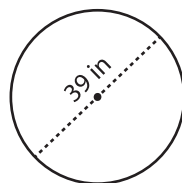
Circumference =

7)



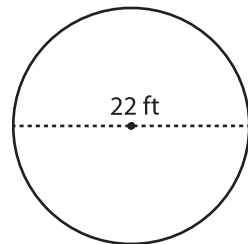
Circumference =

8)



Circumference =

9)



Circumference =

PREVIEW

Gain complete access to the largest collection of worksheets in all subjects!

Members, please log in to download this worksheet.

Not a member? Please sign up to gain complete access.

www.mathworksheets4kids.com