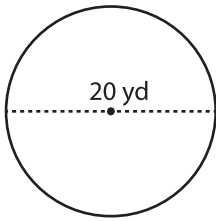


Name : _____

Circle - Circumference

Diameter: MS3

Example :



Circumference of a circle = $2\pi r$ or πd

Diameter (d) = 20 yd

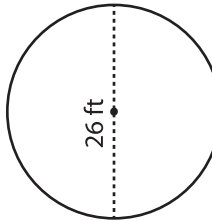
Circumference = πd

= 3.14×20

Circumference = **62.8 yd**

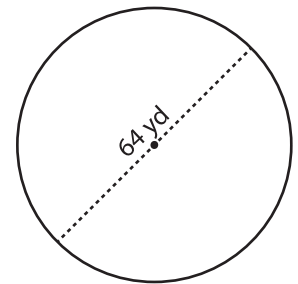
Find the circumference of each circle. Round your answer to the nearest tenth. (use $\pi = 3.14$)

1)



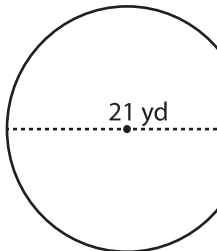
Circumference = _____

2)



Circumference = _____

4)



Circumference = _____

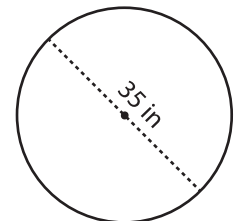
PREVIEW

Gain complete access to the largest collection of worksheets in all subjects!

Members, please log in to download this worksheet.

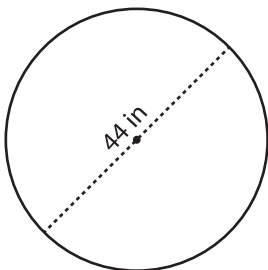
Not a member? Please sign up to gain complete access.

www.mathworksheets4kids.com



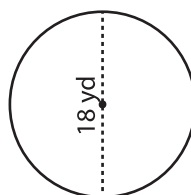
Circumference = _____

7)



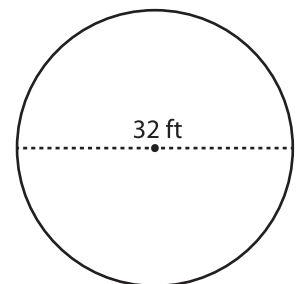
Circumference = _____

8)



Circumference = _____

9)



Circumference = _____