

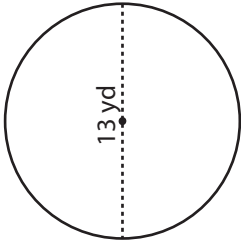
Name : _____

Radius/Diameter: ES1

Circle - Circumference

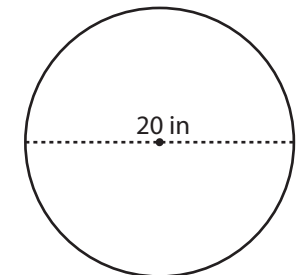
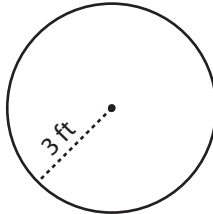
Find the circumference of each circle in terms of π .

1)



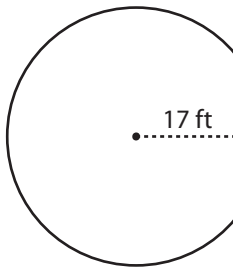
Circumference = _____

2)

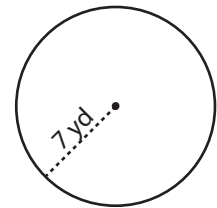


Circumference = _____

4)



Circumference = _____



Circumference = _____

PREVIEW

Gain complete access to the largest collection of worksheets in all subjects!

Members, please log in to download this worksheet.

Not a member? Please sign up to gain complete access.

www.mathworksheets4kids.com

7) A bike wheel has

_____ wheel in terms of π ?

Circumference = _____

8) A minute-hand of a clock is 16 in long. Find the distance traveled by the tip of the minute-hand in one hour. Express your answer in terms of π .

Circumference = _____