

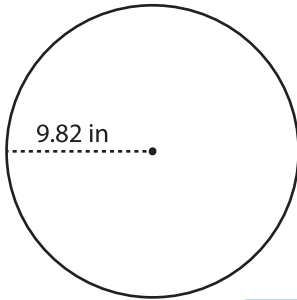
Name : _____

Radius/Diameter: DS1

Circle - Circumference

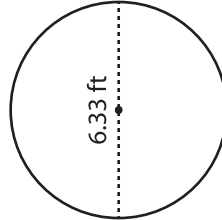
Find the circumference of each circle. Round your answer to two decimal places.
(use $\pi = 3.14$)

1)



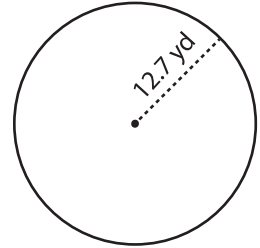
Circumference = _____

2)

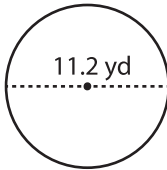


Circumference = _____

3)



4)



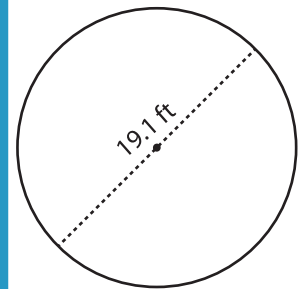
Circumference = _____

PREVIEW
Gain complete access to the largest
collection of worksheets in all subjects!

Members, please
log in to
download this
worksheet.

Not a member?
Please sign up to
gain complete
access.

www.mathworksheets4kids.com



Circumference = _____

7) The diameter of a

the wheel? (use $\pi = 3.14$)

Circumference = _____

8) A minute-hand of a clock is 13.8 in long. Find the distance traveled by the tip of the minute-hand in one hour. Round your answer to two decimal places. (use $\pi = 3.14$)

Circumference = _____