

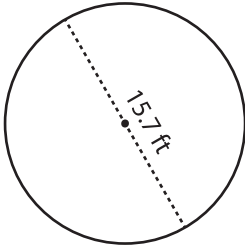
Name : _____

Circle - Circumference

Radius/Diameter: DS2

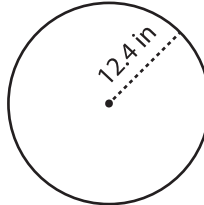
Find the circumference of each circle. Round your answer to two decimal places.
(use $\pi = 3.14$)

1)



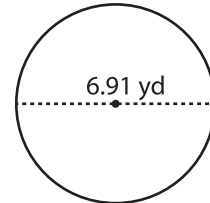
Circumference = _____

2)

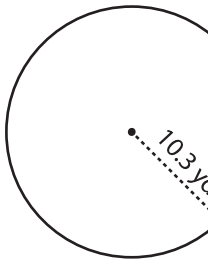


Circumference = _____

3)



4)



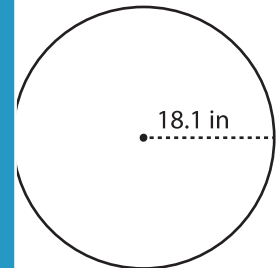
Circumference = _____

PREVIEW
Gain complete access to the largest collection of worksheets in all subjects!

Members, please log in to download this worksheet.

Not a member? Please sign up to gain complete access.

www.mathworksheets4kids.com



Circumference = _____

7) Calculate the circumference of a circle with a radius of 10.3 yd. Round your answer to two decimal places.

Circumference = _____

Circumference = _____

8) What is the circumference of a circle with a radius of 11.1 ft? Round your answer to two decimal places. (use $\pi = 3.14$)

Circumference = _____