

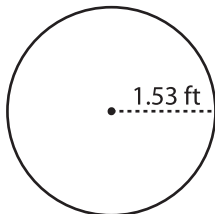
Name : \_\_\_\_\_

Radius/Diameter: DS3

## Circle - Circumference

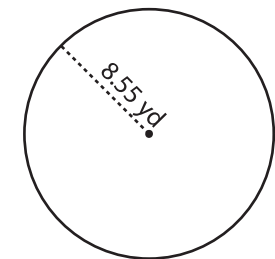
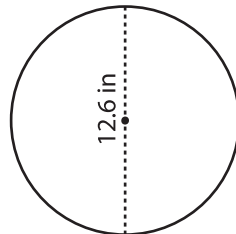
Find the circumference of each circle. Round your answer to two decimal places.  
(use  $\pi = 3.14$ )

1)



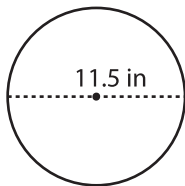
Circumference = \_\_\_\_\_

2)

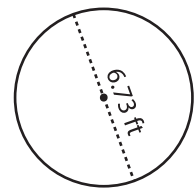


Circumference = \_\_\_\_\_

4)



Circumference = \_\_\_\_\_



Circumference = \_\_\_\_\_

# PREVIEW

Gain complete access to the largest collection of worksheets in all subjects!

Members, please log in to download this worksheet.

Not a member? Please sign up to gain complete access.

[www.mathworksheets4kids.com](http://www.mathworksheets4kids.com)

7) A circular tea-plate has a radius of 1.53 ft. Find the circumference of the plate to two decimal places.

Circumference = \_\_\_\_\_

Circumference = \_\_\_\_\_

8) Find the length of the plastic strip required to fix around the corner of a circular plate with a radius of 14.5 in. (use  $\pi = 3.14$ )

Circumference = \_\_\_\_\_