

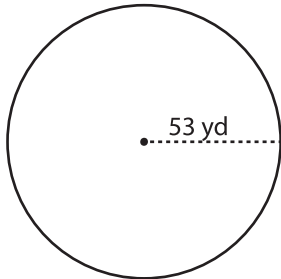
Name : _____

Circle - Circumference

Radius/Diameter: MS2

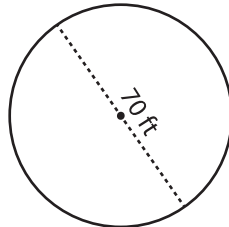
Find the circumference of each circle. Round your answer to the nearest tenth.
(use $\pi = 3.14$)

1)



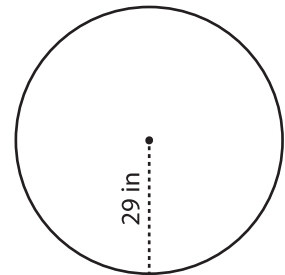
Circumference = _____

2)

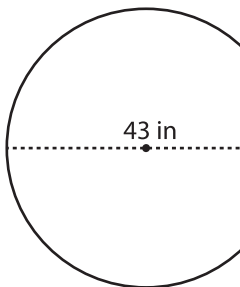


Circumference = _____

3)



4)



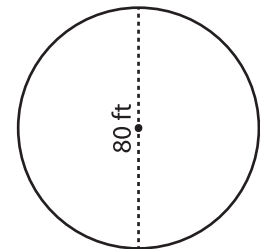
Circumference = _____

PREVIEW
Gain complete access to the largest
collection of worksheets in all subjects!

Members, please
log in to
download this
worksheet.

Not a member?
Please sign up to
gain complete
access.

www.mathworksheets4kids.com



Circumference = _____

7) Calculate the circumference of a circle with a radius of 31 ft. Round your answer to the nearest tenth. (use $\pi = 3.14$)

and your answer to the

Circumference = _____

8) What is the circumference of a circle with a radius of 31 ft? Round your answer to the nearest tenth. (use $\pi = 3.14$)

Circumference = _____