

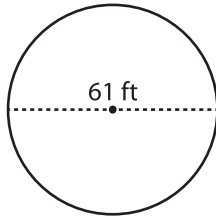
Name : _____

Radius/Diameter: MS3

Circle - Circumference

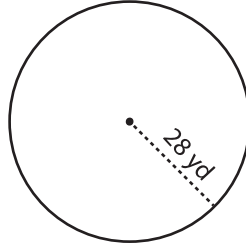
Find the circumference of each circle. Round your answer to the nearest tenth.
(use $\pi = 3.14$)

1)



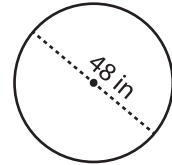
Circumference = _____

2)

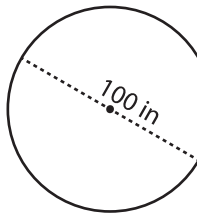


Circumference = _____

3)



4)



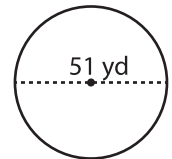
Circumference = _____

PREVIEW
Gain complete access to the largest collection of worksheets in all subjects!

Members, please log in to download this worksheet.

Not a member? Please sign up to gain complete access.

www.mathworksheets4kids.com



Circumference = _____

7) A circular plate has a diameter of 12 in. Find the circumference of the plate. Round your answer to the nearest tenth. (use $\pi = 3.14$)

Circumference = _____

Circumference = _____

8) Find the length of the fencing required to fix around the corner of a circular field with a radius of 55 yd? (use $\pi = 3.14$)

Circumference = _____