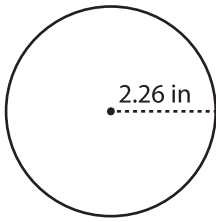


Name : _____

Circle - Circumference

Radius: DS1

Example :



Circumference of a circle = $2\pi r$

Radius (r) = 2.26 in

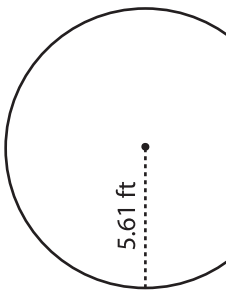
Circumference = $2\pi r$

= $2 \times 3.14 \times 2.26$

Circumference = **14.19 in**

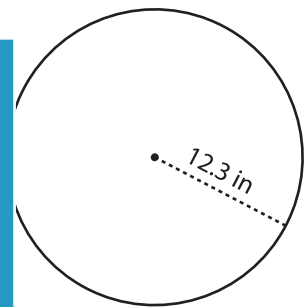
Find the circumference of each circle. Round your answer to two decimal places. (use $\pi = 3.14$)

1)



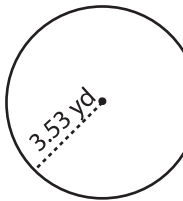
Circumference =

2)



Circumference =

4)



Circumference =

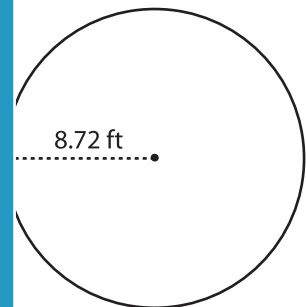
PREVIEW

Gain complete access to the largest collection of worksheets in all subjects!

Members, please log in to download this worksheet.

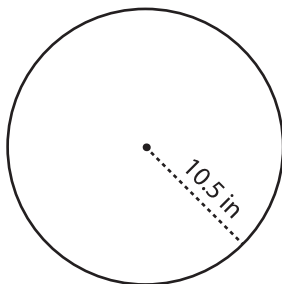
Not a member? Please sign up to gain complete access.

www.mathworksheets4kids.com



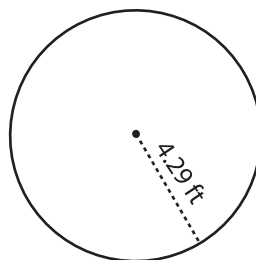
Circumference =

7)



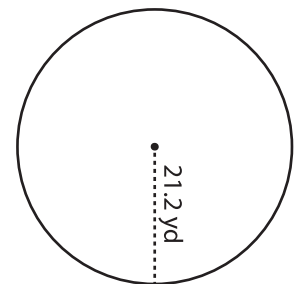
Circumference =

8)



Circumference =

9)



Circumference =