

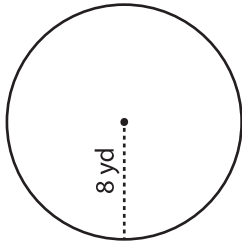
Name : _____

Area & Circumference

ES2

Find the area and circumference of each circle in terms of π .

1)



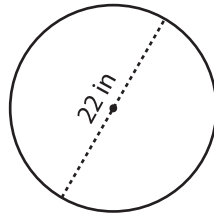
Radius = _____

Diameter = _____

Area = _____

Circumference = _____

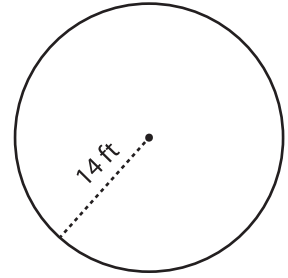
2)



Radius = _____

Diameter = _____

3)



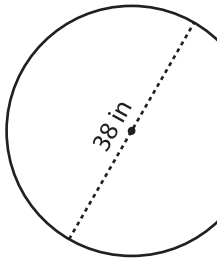
Radius = _____

Diameter = _____

Area = _____

Circumference = _____

4)

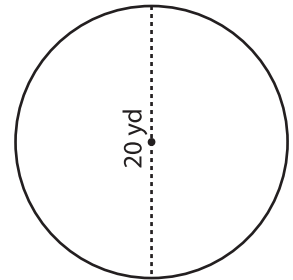


Radius = _____

Diameter = _____

Area = _____

Circumference = _____



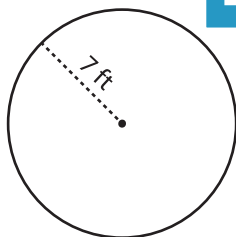
Radius = _____

Diameter = _____

Area = _____

Circumference = _____

7)

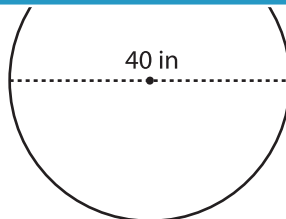


Radius = _____

Diameter = _____

Area = _____

Circumference = _____

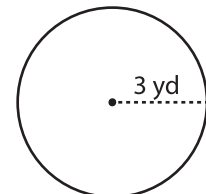


Radius = _____

Diameter = _____

Area = _____

Circumference = _____



Radius = _____

Diameter = _____

Area = _____

Circumference = _____

PREVIEW

Gain complete access to the largest collection of worksheets in all subjects!

Members, please log in to download this worksheet.

Not a member? Please sign up to gain complete access.

www.mathworksheets4kids.com