

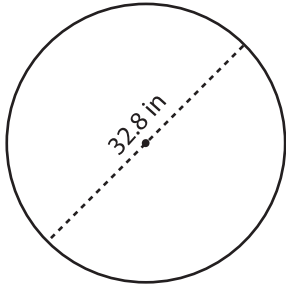
Name : _____

Area & Circumference

DS2

Find the area and circumference of each circle. Round your answers to two decimal places. (use $\pi = 3.14$)

1)



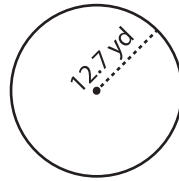
Radius = _____

Diameter = _____

Area = _____

Circumference = _____

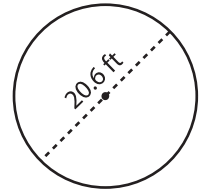
2)



Radius = _____

Diameter = _____

3)



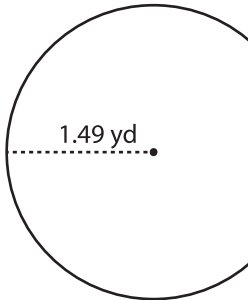
Radius = _____

Diameter = _____

Area = _____

Circumference = _____

4)

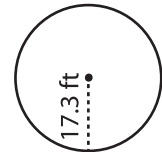


Radius = _____

Diameter = _____

Area = _____

Circumference = _____



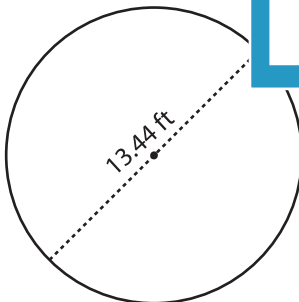
Radius = _____

Diameter = _____

Area = _____

Circumference = _____

7)

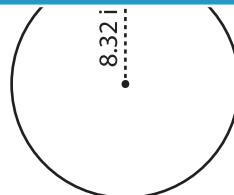


Radius = _____

Diameter = _____

Area = _____

Circumference = _____

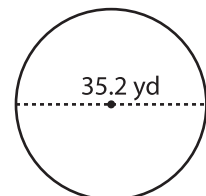


Radius = _____

Diameter = _____

Area = _____

Circumference = _____



Radius = _____

Diameter = _____

Area = _____

Circumference = _____

PREVIEW

Gain complete access to the largest collection of worksheets in all subjects!

Members, please log in to download this worksheet.

Not a member? Please sign up to gain complete access.

www.mathworksheets4kids.com