

Name : \_\_\_\_\_

ES3

## Radius / Diameter

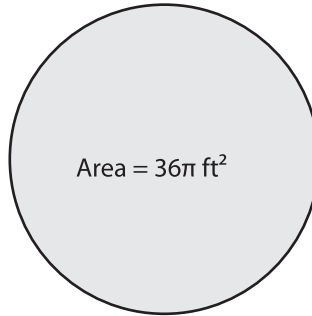
A) Find the radius and diameter of each circle.

1)



Radius = \_\_\_\_\_  
Diameter = \_\_\_\_\_

2)



Radius = \_\_\_\_\_  
Diameter = \_\_\_\_\_

3)

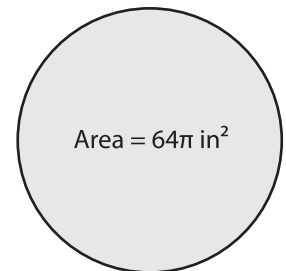


Radius = \_\_\_\_\_  
Diameter = \_\_\_\_\_

4)



Radius = \_\_\_\_\_  
Diameter = \_\_\_\_\_



Radius = \_\_\_\_\_  
Diameter = \_\_\_\_\_

**PREVIEW**

Gain complete access to the largest collection of worksheets in all subjects!

Members, please log in to download this worksheet.


Not a member? Please sign up to gain complete access.

[www.mathworksheets4kids.com](http://www.mathworksheets4kids.com)

B) Choose the correct answer.

7) If the clock has an area of  $49\pi$  in<sup>2</sup>, what is the radius of the clock?

- a) 46 in                      b) 23 in                      c) 92 in



8) The area of the dining table is  $256\pi$  in<sup>2</sup>. Find the radius of the dining table.

- a) 32 in                      b) 16 in                      c) 18 in

