



Name : _____

Comparing Measurements



Sheet 1

Compare the measurements and write them under the appropriate pictures.


1) 53 feet, 74 feet



2) 64 inches, 20 inches



3) 10 inches, 12 inches




Gain complete access to the largest collection of worksheets in all subjects!

Members, please log in to download this worksheet.

Not a member? Please sign up to gain complete access.

www.mathworksheets4kids.com



5) 48 inches, 16 inches

