

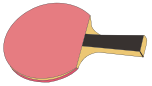
Name : _____

Comparing Measurements

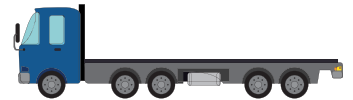
Sheet 2

Compare the measurements and write them under the appropriate pictures.

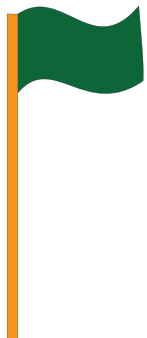
1) 13 inches, 42 inches




2) 15 feet, 20 feet




3) 19 feet, 26 feet



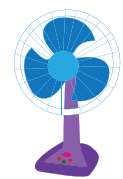
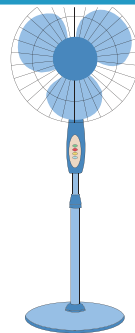
_____ inches



5) 66 inches, 84 inches



_____ inches



PREVIEW

Gain complete access to the largest collection of worksheets in all subjects!

Members, please log in to download this worksheet.

Not a member? Please sign up to gain complete access.

www.mathworksheets4kids.com