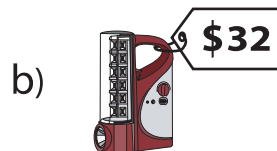
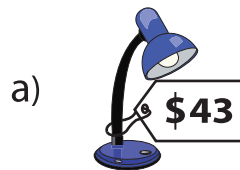


Comparing Prices


1) Which costs more?




2) Which costs less?



3) Which costs less?



5) Which costs more?



PREVIEW

Gain complete access to the largest collection of worksheets in all subjects!

Members, please log in to download this worksheet.

Not a member? Please sign up to gain complete access.

www.mathworksheets4kids.com

7) Which costs less?



8) Which costs more?

