






Comparing Heights

Compare the heights of the buildings and write "taller" or "shorter" as relevant.

Apartment	School	Shopping Mall	Hospital	House
 57 feet	 20 feet	 45 feet	 15 feet	 13 feet

PREVIEW

Gain complete access to the largest collection of worksheets in all subjects!

Members, please log in to download this worksheet.

Not a member? Please sign up to gain complete access.

www.mathworksheets4kids.com

1) The  is _____ than the .

2) The  is _____ than the .

3) The  is _____ than the .

4) The  is _____ than the .

5) Which buildings are taller than the hospital?

6) Which buildings are shorter than the shopping mall?
