

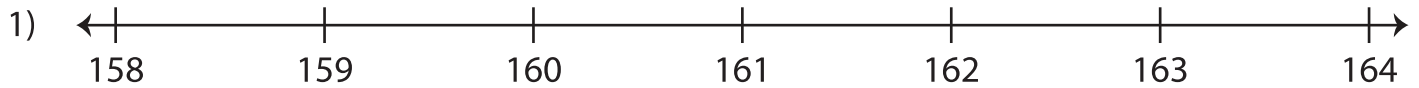
Name : _____

Number Line

Sheet 1

Observe the position of the specified numbers on the number line to answer the questions. Compare using $>$ or $<$.

The numbers on the left are smaller than the numbers on the right.



i) Does 158 lie on the right of 161?


Yes No

iii) Does 160 lie on the left of 163?

Yes No

ii) 161 158

iv) 160 163



i) Is 385 to the right of 370?

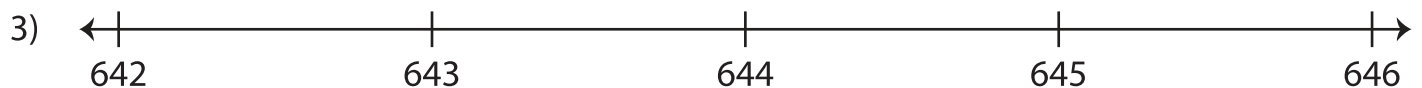
Yes No

iii) Is 390 to the left of 373?

Yes No

ii) 385 370

iv) 373 390



i) Does 646 lie on the left of 643?

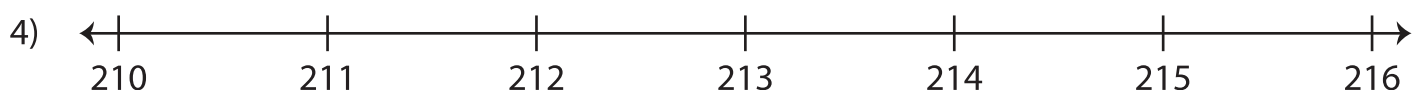
Yes No

iii) Does 645 lie on the right of 642?

Yes No

ii) 643 646

iv) 645 642



i) Is 213 to the left of 216?

Yes No

iii) Is 210 to the right of 214?

Yes No

ii) 213 216

iv) 214 210