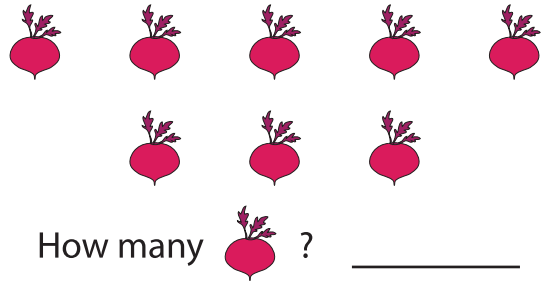



Name : \_\_\_\_\_

# Count and Compare

Sheet 3


1)




Which of these are more?




2)



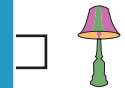
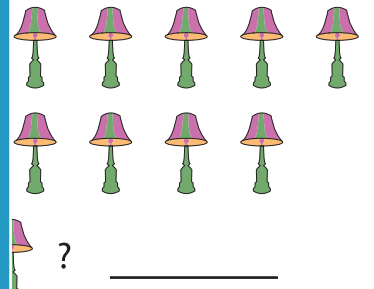
Which of these are more?



3)



Which of these are more?



# PREVIEW


Gain complete access to the largest collection of worksheets in all subjects!

Members, please log in to download this worksheet.

Not a member? Please sign up to gain complete access.

[www.mathworksheets4kids.com](http://www.mathworksheets4kids.com)

4)



Which of these are fewer?

