

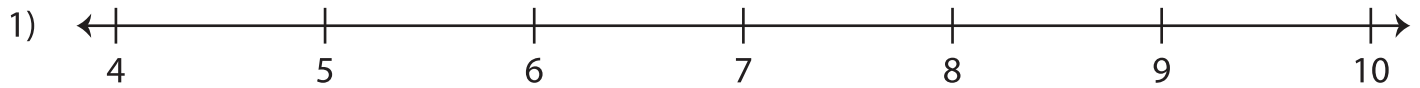
Name : _____

Number Line

Sheet 1

Observe the position of the specified numbers on the number line to answer the questions. Compare using $>$ or $<$.

The numbers on the left are smaller than the numbers on the right.



i) Does 7 lie on the right of 10?


Yes No

iii) Does 8 lie on the left of 9?

Yes No

ii) 10 7

iv) 8 9



i) Is 18 to the right of 13?

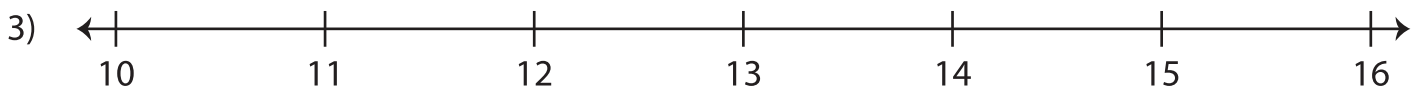
Yes No

iii) Is 15 to the left of 14?

Yes No

ii) 18 13

iv) 14 15



i) Does 16 lie on the left of 12?

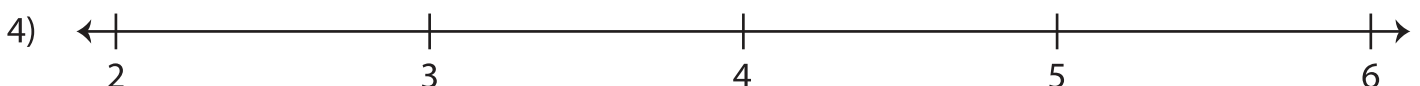
Yes No

iii) Does 13 lie on the right of 11?

Yes No

ii) 12 16

iv) 13 11



i) Is 2 to the right of 4?

Yes No

iii) Is 5 to the left of 6?

Yes No

ii) 4 2

iv) 5 6