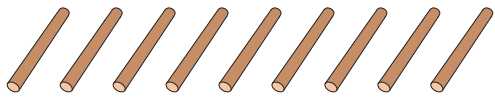


Comparing Numbers

Write the number of sticks in each set. Compare and circle the appropriate option.

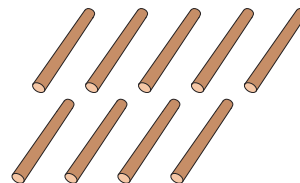
1)




is greater than


is equal to

is less than





2)






3)






4)



is greater than



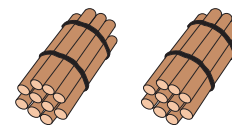
5)



is equal to

is greater than

is less than



PREVIEW

Gain complete access to the largest collection of worksheets in all subjects!

Members, please log in to download this worksheet.

Not a member? Please sign up to gain complete access.

www.mathworksheets4kids.com