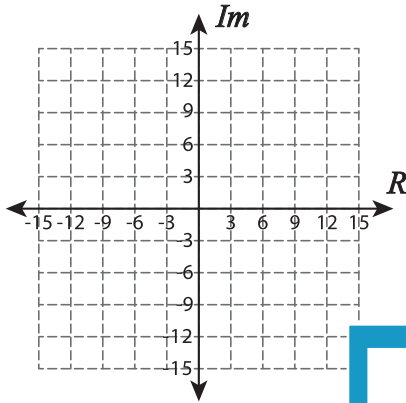


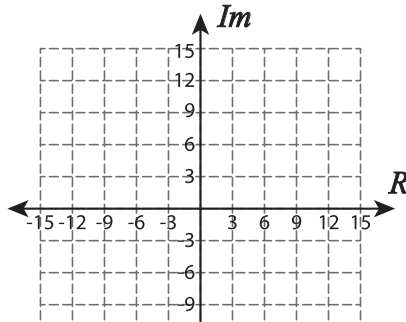
Complex Numbers

A) Plot each complex number.

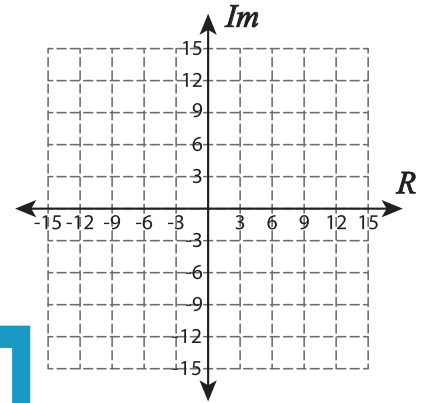
1) $6 - 6i$



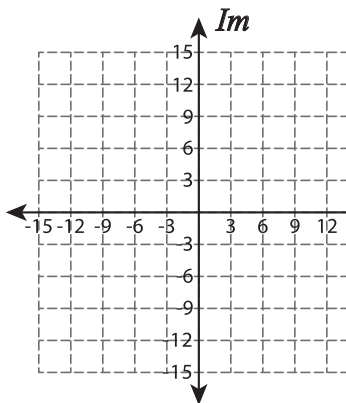
2) $-12 + 15i$



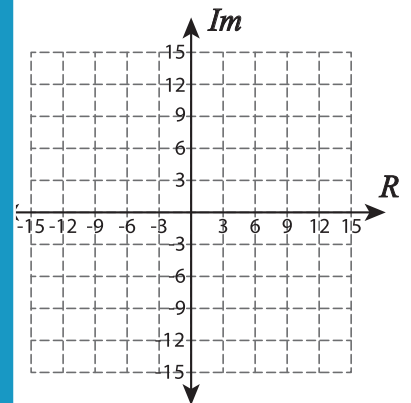
3) $-9 - 6i$



4) $6 + 12i$



$-6 - 9i$



PREVIEW

Gain complete access to the largest collection of worksheets in all subjects!

Members, please log in to download this worksheet.

Not a member? Please sign up to gain complete access.

www.mathworksheets4kids.com

B) What complex number is plotted?

7)

