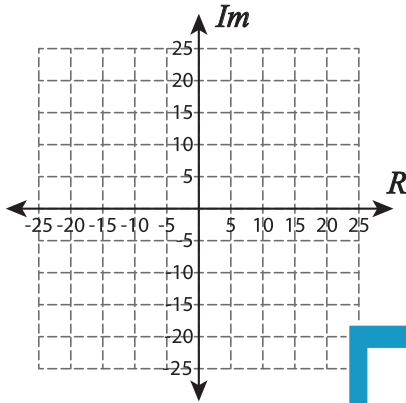


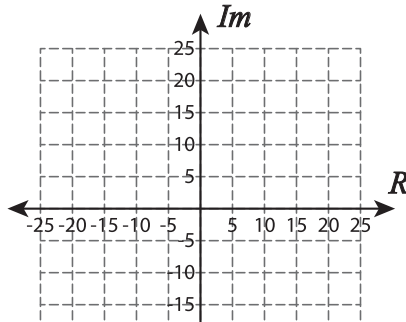
Complex Numbers

A) Plot each complex number.

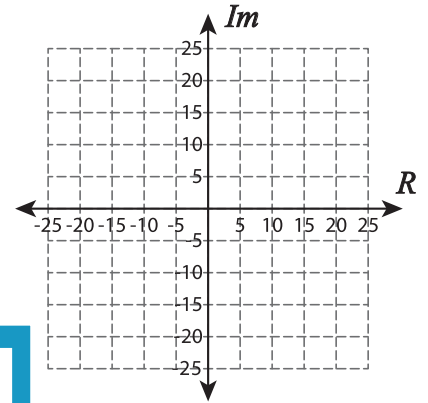
1) $-15 - 10i$



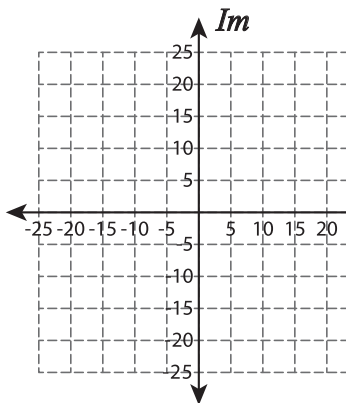
2) $15 + 25i$



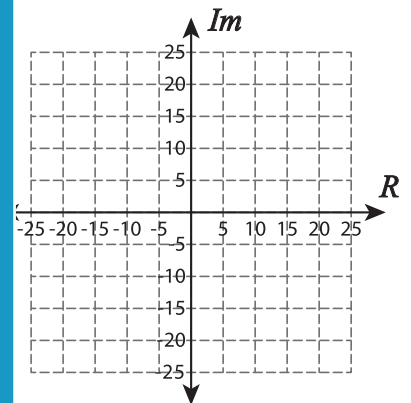
3) $-20 + 10i$



4) $5 - 15i$



$10 - 25i$



PREVIEW

Gain complete access to the largest collection of worksheets in all subjects!

Members, please log in to download this worksheet.

Not a member? Please sign up to gain complete access.

www.mathworksheets4kids.com

B) What complex number is represented by the point on the number line?

7)

