


Name : _____

Converting Fractions, Decimals, and Percents

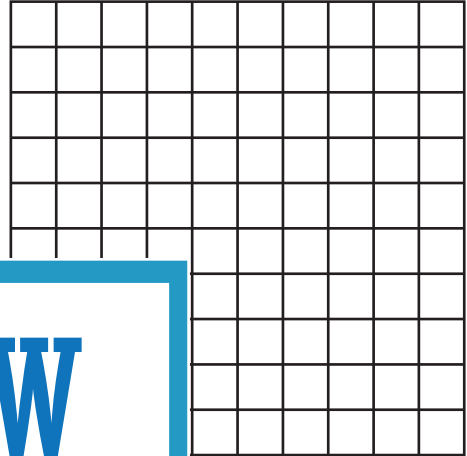
Sheet 3

Shade the grid to represent the given values, and convert between fractions, decimals, and percents.

1) Shade $\frac{32}{100}$ of the grid.




2) Shade $\frac{6}{100}$ of the grid.



Percent : _____

Decimal : _____

3) Shade 75% of



of the grid.

Decimal : _____

Fraction : _____

Fraction : _____

Decimal : _____

PREVIEW

Gain complete access to the largest collection of worksheets in all subjects!

Members, please log in to download this worksheet.

Not a member? Please sign up to gain complete access.

www.mathworksheets4kids.com