

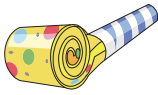
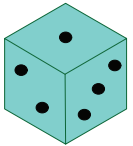
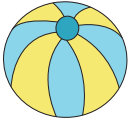


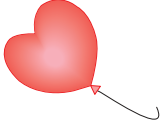



Name : _____

How Much Money?

Add the prices of the items, and write the total amount.

 57¢	 44¢	 12¢	 8¢
 18¢	 70¢	 45¢	 15¢

1)  + **PREVIEW** = _____ ¢

2)  + **Gain complete access to the largest collection of worksheets in all subjects!** = _____ ¢

3)  + **Members, please log in to download this worksheet.** **Not a member? Please sign up to gain complete access.** = _____ ¢

4)  + www.mathworksheets4kids.com = _____ ¢

5)  +  = _____ ¢

6)  +  +  = _____ ¢