


Is There Enough Money?


1) Clara has \$ _____



_____ in her wallet. She wants to buy a

men's shirt priced at \$44.50. Does Clara have enough money to buy the shirt?

2) Jack has \$ _____



_____ in his wallet. He wants to buy

a perfume priced at \$ _____


3) Grace has \$ _____

vacuum cleaner priced at \$ _____

4) Arthur has \$ _____

pillow priced at \$29.00. Does Arthur have enough money to buy the pillow?

5) Emily has \$ _____



_____ in her wallet. She wants to buy an

umbrella priced at \$23.70. Is the money enough for Emily to buy the umbrella?

PREVIEW

Gain complete access to the largest collection of worksheets in all subjects!

Members, please log in to download this worksheet.

Not a member? Please sign up to gain complete access.

www.mathworksheets4kids.com

_____ She wants to buy a

_____ vacuum cleaner.

_____ He wants to buy a travel