




Saving Money

Find the total amount in each piggy bank and answer the questions.



PREVIEW

Gain complete access to the largest collection of worksheets in all subjects!

Members, please log in to download this worksheet.

Not a member? Please sign up to gain complete access.

www.mathworksheets4kids.com

1) Whose piggy bank has the most money?

2) What is the total savings in Cooper's piggy bank?

3) If Anna puts a 10 cent coin in her piggy bank, what will her savings be?

4) How much money has Oscar saved in his piggy bank?

5) If Max gives all the coins from his piggy bank to his mother, how much will he have?
