




Saving Money

Find the total amount in each piggy bank and answer the questions.



PREVIEW

Gain complete access to the largest collection of worksheets in all subjects!

Members, please log in to download this worksheet.

Not a member? Please sign up to gain complete access.

www.mathworksheets4kids.com

1) What is the total saving in Heidi's piggy bank?

2) Whose piggy bank has the most money?

3) If Flynn gives all the coins from his piggy bank to his sister, how much will he have?

4) If Holly puts a 20 cent coin in her piggy bank, what will her savings be?

5) How much money has Lola saved in her piggy bank?
