







Name : _____

Counting Coins & Notes

Up to \$5: S2

Count the money and write the total amount.

<p>1)</p> 	<p>_____</p>
<p>2)</p> 	<p>_____</p>
<p>3)</p> 	<p>_____</p>
<p>4)</p> 	<p>_____</p>
<p>5)</p> 	<p>_____</p>
<p>6)</p> 	<p>_____</p>

PREVIEW

Gain complete access to the largest collection of worksheets in all subjects!

Members, please log in to download this worksheet.

Not a member? Please sign up to gain complete access.

www.mathworksheets4kids.com